

AZ Vocabulary

1. Draw **models** to find $243 + 128$.




Follow the steps.

Step 1 Add **hundreds**. $2 + 1 =$
_____ hundreds

Step 2 Add **tens**. $4 + 2 =$ _____ tens

Step 3 Add **ones**. $3 + 8 =$ _____

So, $243 + 128 =$ _____.

Hundreds	Tens	Ones
		

Record Partial Sums

$$\begin{array}{r}
 243 \\
 + 128 \\
 \hline
 300 \\
 60 \\
 + 11 \\
 \hline
 \end{array}$$

2. Draw models to find $151 + 267$.

Add hundreds. $\underline{1} + \underline{2} =$
_____ hundreds

Add tens. _____ + _____ =
_____ tens

Add ones. _____ + _____ = _____

So, $151 + 267 =$ _____.

Hundreds	Tens	Ones

Record Partial Sums

On the Back!

3. Draw models and use partial sums to find $356 + 280$.