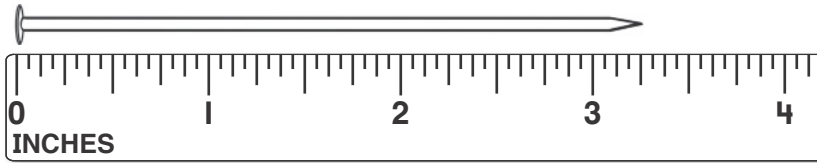


AZ Vocabulary

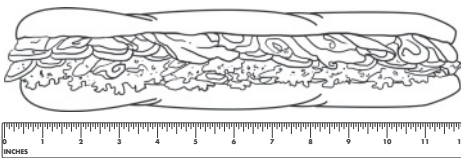
1. You can use a **ruler** to measure length in **inches** or **feet**.



An **estimate** for the length of the nail could be about 4 inches.

This nail measures about _____ inches long.

2. There are 12 inches in 1 foot.




This sandwich measures about _____ inches long.

It is about _____ foot long.

You can use a measuring tape to measure inches, feet, or yards.

There are 3 feet in 1 yard.



This string is about _____ feet long.

It is about _____ yard long.

On the Back!

3. Estimate the length of a marker in inches.
Use a ruler to measure it to the nearest inch.