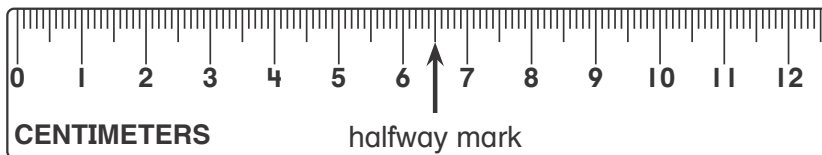



**AZ Vocabulary**

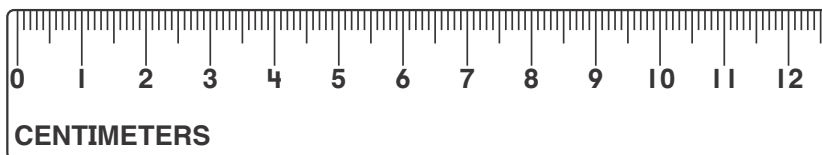
1. One **centimeter (cm)** is shorter than 1 inch.

Use the halfway mark on the ruler to measure to the **nearest centimeter**.

This paper clip is about \_\_\_\_\_ centimeters long.



2. About how long is the chili pepper? An estimate for the length of the pepper can be about 9 centimeters.



Line up the 0 mark of the ruler with one end of the pepper.

The pepper is between 9 and \_\_\_\_\_ centimeters long.

Is it more than halfway between the numbers? \_\_\_\_\_

So, the chili pepper is about \_\_\_\_\_ centimeters long.

**On the Back!**

3. Estimate the length of your thumb. Then measure the length of your thumb to the nearest centimeter.